

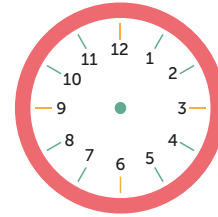
Add the missing hands to each clock to show the time.



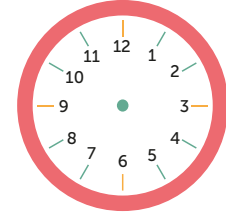
Quarter past 12



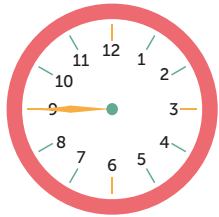
Quarter past 1



Quarter past 2



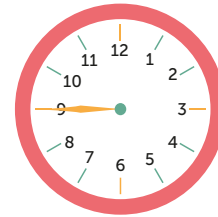
Quarter past 3



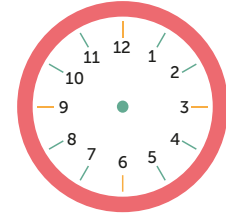
Quarter to 4



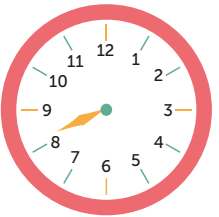
Quarter to 5



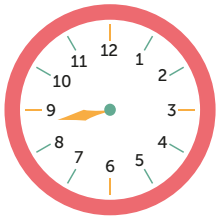
Quarter to 6



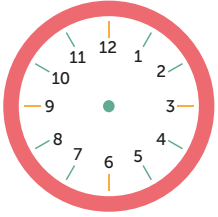
Quarter to 7



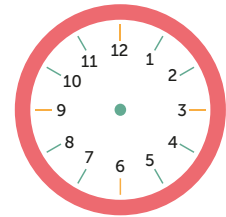
Quarter past 8



Quarter to 9



Quarter to 10



Quarter past 11