


Destination Questions

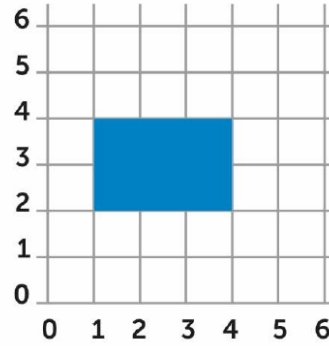
1 

Plot the following coordinates:

(2,3), (3,2), (1,5), (5,1)



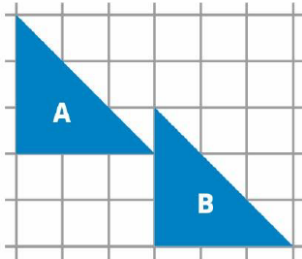
2 



Record the coordinates for the vertices of the rectangle.

3 

Describe the translation of the triangle from A to B.



4 

Draw a square on a grid and translate it 2 units to the left and 3 units upwards.

